



**INDIAN SCHOOL MUSCAT  
MIDDLE SECTION  
DEPARTMENT OF SOCIAL SCIENCE  
FROM GATHERING TO GROWING FOOD**



NAME: \_\_\_\_\_ CLASS VI SEC: \_\_\_\_\_ ROLL NO: \_\_\_\_\_ DATE: \_\_\_\_\_ /08/2018

S.NO

MARKS

**I NAME THE FOLLOWING.**

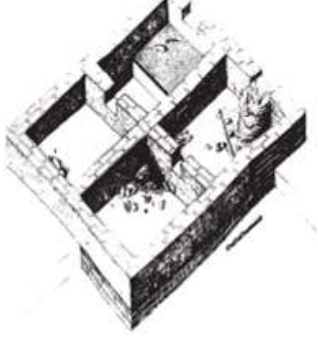



**5**

- a. The most common animal generally kept by the people in Mehrgarh.  
\_\_\_\_\_
- b. The earliest villages to be discovered and excavated. \_\_\_\_\_
- c. The first animal to be tamed by the early people. \_\_\_\_\_
- d. The site that provides the evidence of tools made from ' fossil wood'.  
\_\_\_\_\_
- e. Groups of families related to one another, belonging to two or three generations and living together in small settlements. \_\_\_\_\_

**II FILL IN THE BLANKS.**

**10**

- a. \_\_\_\_\_ can survive more easily than cattle in dry, hilly environments.
- b. \_\_\_\_\_ began about 12000 years ago.
- c. The earliest plants to be domesticated were \_\_\_\_\_.
- d. The earliest domesticated animals' include \_\_\_\_\_.
- e. \_\_\_\_\_ were used for cooking grains and rice.
- f. From \_\_\_\_\_ flint stones were brought for settlement.
- g. Cowries were used to make ornaments and brought from \_\_\_\_\_.
- h. \_\_\_\_\_ were used for grinding the grain.
- i. In Burzahom, people built \_\_\_\_\_ which were dug into the ground with steps leading into them.
- j. \_\_\_\_\_ were built both inside and outside the house built in pits.

III	<b><u>OBSERVE THE FOLLOWING AND FILL IN THE BLANKS.</u></b>	4
	 <p>A. Square or rectangular houses of Mehrgarh had _____ or more compartments.</p>	
	 <p>B. Decorated earthen pots were used for storing food in _____.</p>	
	 <p>C. The dead people were buried with goats which were meant to serve as _____ in the next world</p>	
	 <p>D. The stone tools in the _____ Age were different from the ones found in the Palaeolithic Age.</p>	

**IV ANSWER THE FOLLOWING QUESTIONS IN 2 POINTS.**

1. How did the hunters learn farming? 2
2. What were the factors which led to a new settled way of life? 2
3. What were the features of the houses found in the archeological sites at Burzahom? 2

**V ANSWER THE FOLLOWING QUESTIONS IN 3 POINTS.**

4. Why are domesticated plants and animals different from wild ones? 3
5. What are the features of a tribe? 3

**VI ANSWER THE FOLLOWING QUESTION IN FOUR POINTS.**

6. How did the farmers become herders? 4

**VII. ON THE OUTLINE MAP OF INDIA, CIRCLE THE FOLLOWING PLACES.** 8

1. Mehrgarh	2. Burzahom	3. Chirand
4. DaojaliHading	5. Paiyampalli	6. Hallur
7. Koldihwa	8. Mahagara	

